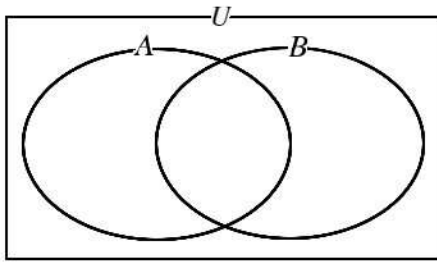
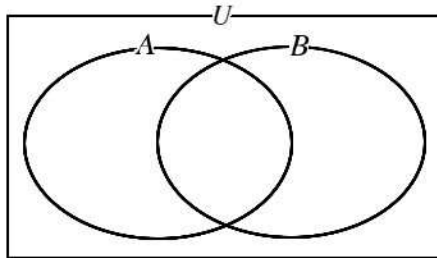


集合  $U$  の部分集合  $A$ 、 $B$  について、以下の各集合を表す部分をそれぞれ斜線で示せ。

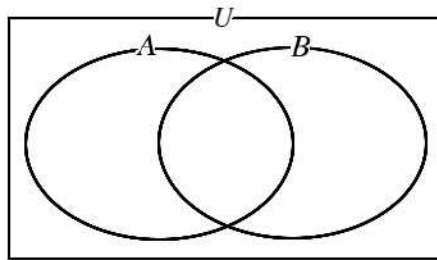
(1)  $A$



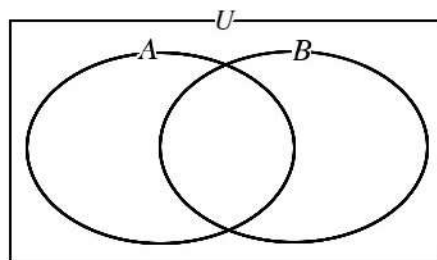
(2)  $B$



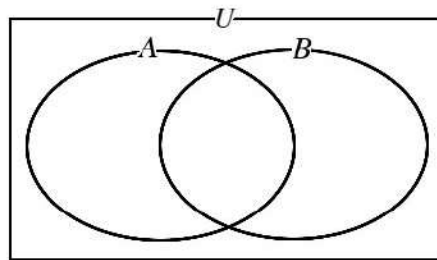
(3)  $\bar{A}$



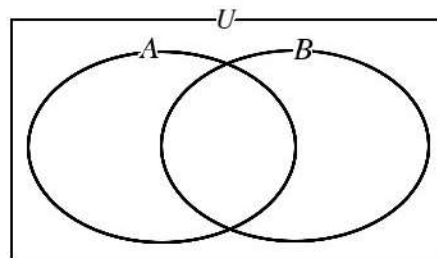
(4)  $\bar{B}$



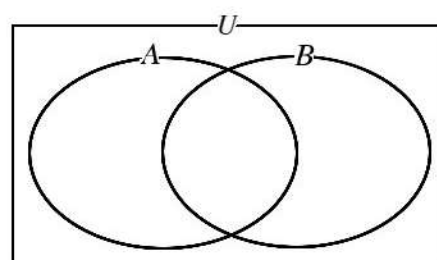
(5)  $A \cap B$



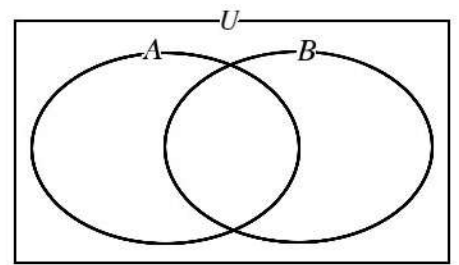
(6)  $A \cup B$



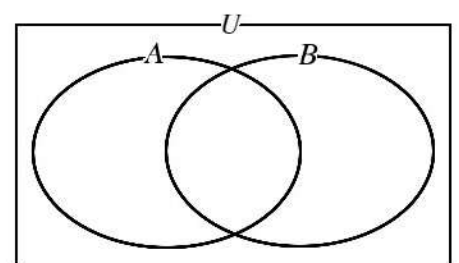
(7)  $\overline{A \cap B}$



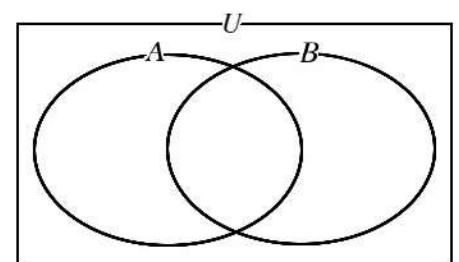
(8)  $\overline{A \cup B}$



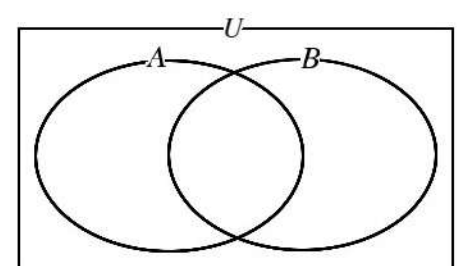
(9)  $A \cap \bar{B}$



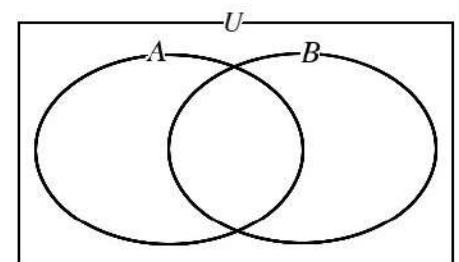
(10)  $A \cup \bar{B}$



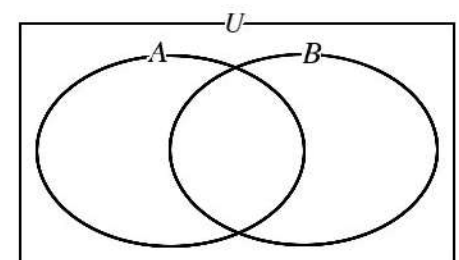
(11)  $\bar{A} \cap B$



(12)  $\bar{A} \cup B$



(13)  $\bar{A} \cap \bar{B}$



(14)  $\bar{A} \cup \bar{B}$

